



NAME \_\_\_\_\_

DATE \_\_\_\_\_

## MAKE A TEN TO ADD WITHIN 20

Fill in the blanks to make the number sentences true. Draw number bonds to help you subtract from the ten.

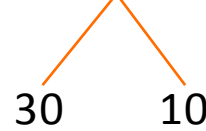
g)  $50 - 3 = \underline{\quad}$



$10 - \underline{\quad} = \underline{\quad}$

$\underline{\quad} + \underline{\quad} = \underline{\quad}$

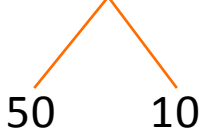
k)  $40 - 3 = \underline{\quad}$



$\underline{\quad} - \underline{\quad} = \underline{\quad}$

$\underline{\quad} + \underline{\quad} = \underline{\quad}$

h)  $60 - 7 = \underline{\quad}$



$10 - \underline{\quad} = \underline{\quad}$

$\underline{\quad} + 50 = \underline{\quad}$

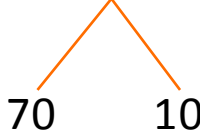
l)  $50 - 6 = \underline{\quad}$



$\underline{\quad} - \underline{\quad} = \underline{\quad}$

$\underline{\quad} + \underline{\quad} = \underline{\quad}$

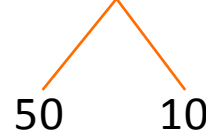
i)  $80 - 7 = \underline{\quad}$



$\underline{\quad} - \underline{\quad} = \underline{\quad}$

$3 + \underline{\quad} = \underline{\quad}$

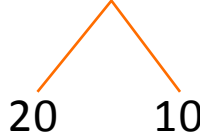
m)  $60 - 2 = \underline{\quad}$



$10 - \underline{\quad} = \underline{\quad}$

$8 + \underline{\quad} = 58$

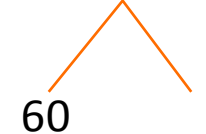
j)  $30 - 3 = \underline{\quad}$



$\underline{\quad} - \underline{\quad} = \underline{\quad}$

$7 + \underline{\quad} = \underline{\quad}$

n)  $70 - 2 = \underline{\quad}$



$\underline{\quad} - \underline{\quad} = \underline{\quad}$

$8 + \underline{\quad} = \underline{\quad}$